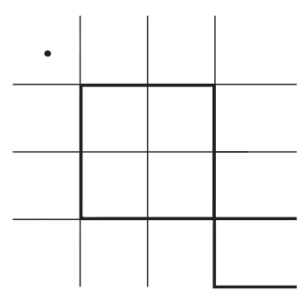





# Rechnen mit dem Malkreuz

1. Multipliziere mit Hilfe des Vierhunderterfeldes. Verwende das Malkreuz.



a.  $16 \cdot 14 =$



b.  $19 \cdot 17 =$

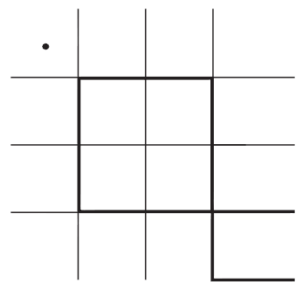


c. Welche Malaufgabe wird hier dargestellt?




2. Rechne mit dem Malkreuz und zeige am Vierhunderterfeld.

a.  $14 \cdot 14 =$



b.  $13 \cdot 15 =$



c.  $16 \cdot 18 =$

